

TARGETERWINGS STANDARD FIVE -YEAR 2021

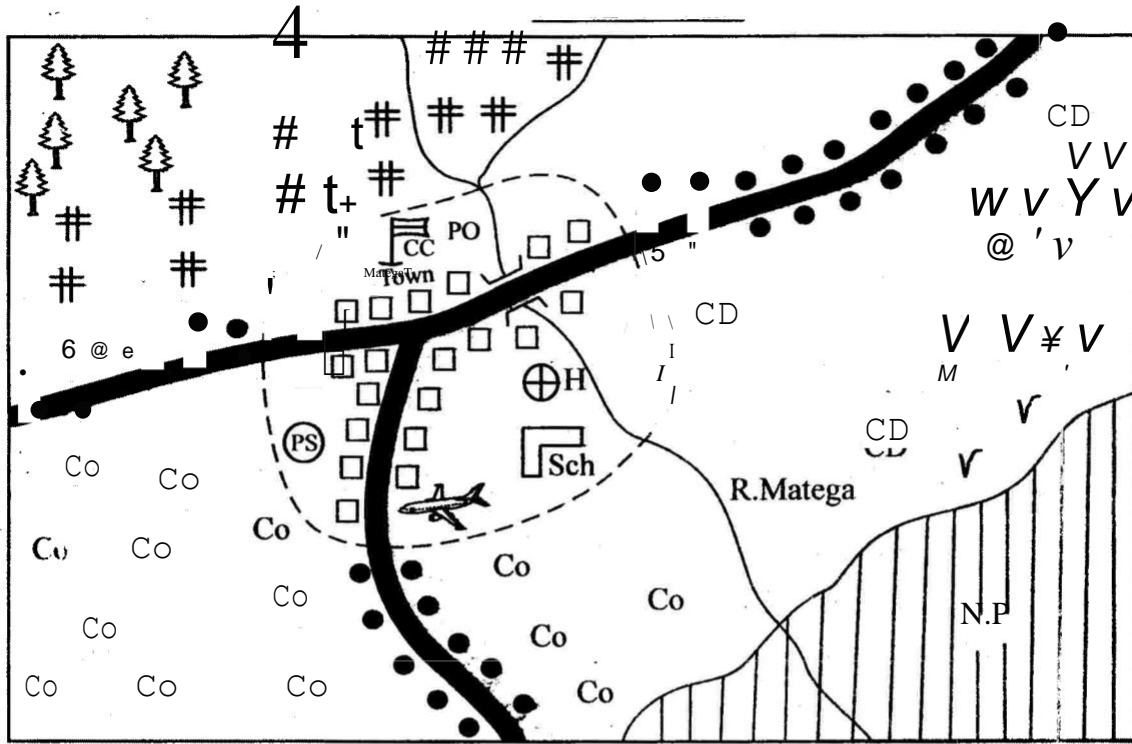


CONTINUOUS ASSESSMENT TE5{gs}

SOCIAL STUDIES & R.E

TIME: 2hrs 15 mins

MATEGA AREA







KEY

#### Tea	P.O Post Office	{Ki} Na»oar raa	CD Cattle Dip
CoCoCo Coffee	@ Police Station	Tarmac road	.A Airstrip
44 Forest	GD Hospital	VVV Grass	••• Settlement
f Chief's Camp	a School	• Borehole	

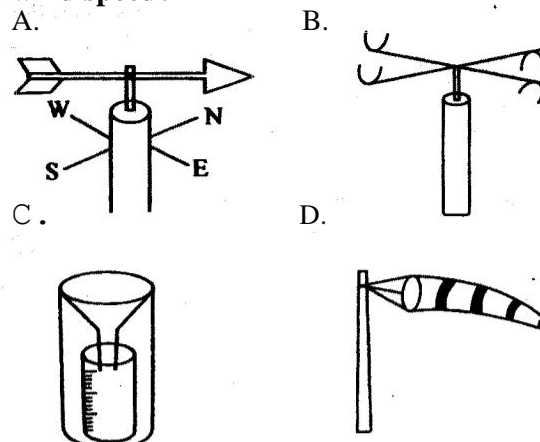
Study the map of Matega Area above and then answer questions 1 to 7.

- What is the general direction of R. Matega?
 - From North to South West.
 - From North to South East.
 - From South West to North.
 - From South East to North.
- Which is the **main** economic activity of Matega area?
 - Fishing.
 - Saw milling.
 - Cultivation.
 - Pastoralism.
- Who is the head of Matega area?
 - Chief.
 - D.C.
 - Governor.
 - Senator.
- Which means of transport is mostly used by people visiting the ?
 - Railway.
 - Water.
 - Road.
 - Air.
- Which type of settlement is found in Matega area?
 - Clustered.
 - Linear.
 - Nucleated.
 - Sparse.
- Which type of climate is widespread in the area?
 - Cool and wet.
 - Hot and wet.
 - Hot and dry.
 - Cool and dry.
- Most people in Matega area are
 - Hindus.
 - Muslims.
 - Christians.
 - Pagans.
- Which of the following countries is found to the South of Kenya?
 - Ethiopia.
 - Somalia.
 - Tanzania.
 - Uganda.
- Which of the following methods of storing food is the odd one out?
 - Using cans.
 - Using sacks.
 - Using gourds.
 - Using fridges.
- Which one of these language groups belongs to Cushites **only**?
 - Galla, Iraqw, Boran.
 - Luo, Nandi, Kipsigis.
 - Ameru, Pokomo, Waswahili.
 - Abagusi, Abakuria, Balughia.

11. One of the following ways is the **best** to use in order to maintain law and order in the society. Which one is it?
 A. Punishing the law breakers .
 B. Educating the public to observe laws.
 C. Arresting the law breakers .
 D. Employing many police officers.
12. Which one of the following is not an element of a good map?
 A. Frame. B. Title.
 C. Key. D. Colour.
13. Which is the other name for indigenous forests?
 A. Imported trees. B. New trees.
 C. Hard wood trees. D. Soft wood trees .
14. What is the **main** reason why many young people are found in urban areas?
 A. They go to look for job opportunities.
 B. They go to get marriage partners.
 C. They go to visit relatives.
 D. They avoid work at homes.
15. Which body in Kenya is in charge of elections?
 A. ECK B. IEB
 C. ACK. D. IIB
16. Which was the **main** method that was used by the Africans traditionally to teach various skills and arts?
 A. Teaching. B. Apprenticeship.
 C. Training in school. D. Copying.
17. Which one of the following road signs shows that there is bump ahead?
 A.  B. 
 C.  D. 

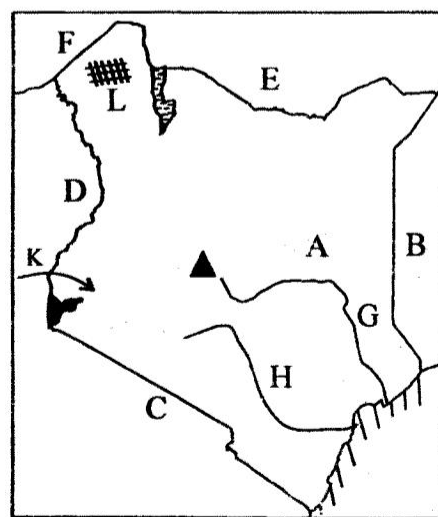
18. Which of the following is a border town in Kenya?
 A. Mandera. B. Kiambu.
 C. Nanyuki. D. Nakuru.
19. Which factor below mainly influences the distribution of people in a place?
 A. Education level. B. Means of transport.
 C. Climate. D. Attitude.
20. (i) The soil is fertile
 (ii) The soil is very fine.
 (iii) The soil has a soft texture
 (iv) The soil is found along the River valleys
 Which type of soil is described above?
 A. Sandy soil. B. Volcanic soil
 C. Loam soil. D. Alluvial soil.
21. Which one of the following is **not** a duty of a child?
 A. Assisting in home duties.
 B. Going to school.
 C. Providing food to the family.
 D. Doing homework.

22. Which weather instrument is used to measure the wind speed?



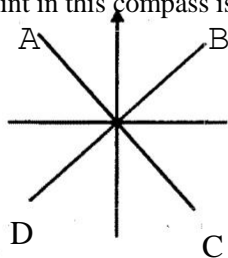
23. Which one of the following is **not** a cause of soil erosion in a given place?
 A. Deforestation. B. Deforestation.
 C. Overstocking. D. Overgrazing.
24. Which communities interacted in the past. Who among the following communities interacted through trade?
 A. Luo and Luhya. B. Agikuyu and Ameru.
 C. Maasai and Agikuyu. D. Gikuyu and Akamba.
25. Which one of the following explains why the Northern parts of Kenya are scarcely populated?
 A. The land is infertile.
 B. There are few people settled there.
 C. The area has unreliable rainfall.
 D. The area has high rainfalls.
26. Which one of the following is a benefit of wildlife?
 A. Creates employment.
 B. They destroy edible plants.
 C. There is poaching of big animals.
 D. They don't provide medicine at all.
27. Which crop here is processed in a jaggery?
 A. Tea. B. Sugarcane. C. Cotton. D. Rice.

Use the map below to answer questions 28 to 31



28. Which physical feature is shown by letter G above?
 A. River Sio. B. River Ewaso Nyiro.
 C. Athi River. D. Tana River.
29. Which plains are represented by letter L above?
 A. Yatta. B. Kano. C. Lokitipi. D. Loita.
30. Which community migrated through route K above?
 A. Abaluhya. B. Agikuyu. C. Tugen. D. Kamba.

31. Which country above doesn't have a coast line?
A. B B. A C. C D. D
32. Which country below was the last to be granted independence?
A. Ethiopia. B. Southern Sudan.
C. South Sudan. D. Kenya.
33. Democracy where people elect leaders to make decisions on their behalf is known as _____
A. participatory democracy.
B. direct democracy.
C. delegative democracy.
D. representative democracy.
34. Which is the best condition for rearing dairy cattle?
A. Hot and dry climate.
B. Cool and dry climate.
C. Cool and wet climate.
D. Hot and wet climate.
35. Which one of the following is not an among the Kalenjin?
A. Sawe. B. Mwangi. C. Chum
D. Maina
36. Which type of soil can one get also in Kenya?
A. Sandy soil. B. Alluvial soil.
C. Loam soil. D. Clay soil.
37. Which one of the following is a characteristic of beef farming in Kenya?
A. Paddocks are created.
B. Done in large scale.
C. Carried out in cool and wet places.
D. It is done in ranches.
38. Which is the most frequent way of sending messages to people today in Kenya?
A. Using internet and computers.
B. Using telegrams.
C. Using televisions.
D. Using radio.
39. Which one of the following is not a product of traditional industry?
A. Pots. B. Cars. C. Baskets. D. Arrows.
40. Which point in this compass is North West?



41. Which one of the following modes of communication is not one of the most recent forms?
A. Smoke signals. B. Internet.
C. Radio. D. Cell phones.
42. A person who loves his or her own country is said to be _____
A. citizen. B. patriotic.
C. leader. D. pupil.
43. One of the following is not a method of rearing poultry. Which one is it?
A. Deep litter. B. Cage.
C. Zero grazing. D. Backyard.
44. Who among the following maintains law and order in Kenya?
A. Judiciary.
B. Teachers.
C. The Kenya Defence Forces.
D. The Kenya Police Service.

45. Which is the main tourist attraction in Kenya Coast?
A. Wildlife. B. Sandy beaches.
C. Beautiful sceneries. D. Mountain climbing.
46. Which colour represents water or a drainage feature in a map?
A. Blue. B. Purple.
C. Black. D. Red.
47. Joan planted some trees where there had never had trees. What did she practise?
A. Deforestation. B. Desertification.
C. Afforestation. D. Re-afforestation.
48. A thermometer can have two liquids. These liquids are mercury and _____
A. water. B. juice.
C. tea. D. alcohol.
49. Which type of vegetation is thick and has tall trees close together?
A. Desert vegetation.
B. Highland forests.
C. Savannah vegetation.
D. Woodland savannah vegetation.
50. Which one of the following is the major cause of road accidents in Kenya?
A. Unroadworthy vehicles.
B. Many bumps along the roads.
C. Bad roads.
D. Carelessness of road users.
51. Which one of the following is not an importance of soil?
A. People use it to make pots.
B. Landslides.
C. Used in building houses.
D. Plants are grown there.
52. What is an age group?
A. People born and initiated almost at the same time.
B. Namesake.
C. People who graduate together.
D. People who are peers.
53. Which type of hens are kept for meat only?
A. Chicken. B. Local chicken.
C. Broilers. D. Layers.
54. Which one of the following is not an arm of the government?
A. Executive. B. Parliament.
C. Judiciary. D. Cabinet.
55. Which of the following minerals is mined using a dredger?
A. Limestone. B. Soda ash.
C. Fluorspar. D. Diatomite.
56. Goods that Kenyans sell outside the country are _____ to those countries, said to
A. exported B. imported
C. brought D. transferred
57. Which industry below is an example of a service industry?
A. Cement making. B. Fruit processing.
C. Shoe repair. D. Shoe making.
58. Which type of rainfall is experienced on a mountain?
A. Normal rainfall. B. Heavy rainfall.
C. Convectional rainfall. D. Relief rainfall.
59. Where does Kenya lie?
A. SN, 5°S B. 34E, 51E
C. 5°N, 5N D. 12N, 5S
60. Who was the first prime minister in Kenya?
A. Raila Odinga. B. Jomo Kenyatta.
C. Daniel Moi. D. Uhuru Kenyatta.

SECTION B

CHRISTIAN RELIGIOUS EDUCATION

61. Which type of sin did Adam and Eve commit when they ate the fruit from the forbidden tree?
A. Selfishness. B. Unfairness.
C. Disobedience. D. Unkindness.
62. I led the Israelites out of Egypt. Who am I?
A. Caleb. B. Aaron. C. Joshua. D. Moses.
63. What quality did Abraham show when he agreed to sacrifice his son Isaac?
A. Love. B. Faith. C. Peace. D. Joy.
64. God destroyed living things during the times of Noah because of one of the following. Which one is it?
A. People's disobedience to God.
B. Obedience to God.
C. Joy.
D. Sacrifice.
65. What did Jacob steal from Esau when tricked his brother?
A. Joy. B. Faith. C. Blessing D. Curse.
66. What made Joseph's brothers go had gone to
A. get food. B. look for their brother.
C. look for pasture. D. the king of Egypt.
67. Elkanah and Hannah were
A. Jacob. B. Abraham. C. David. D. Samuel.
68. Who among the following was not accepted by God?
A. Abel. B. Cain. C. Esau. D. Esau.
69. What was the purpose of Jesus' visit to the Samaritans?
A. To worship him. B. To give them gifts.
C. To see him. D. To obey his father.
70. What does the soil in the parable of the sower represent?
A. The word of God.
B. People who hear the word of God.
C. God.
D. Jesus.
71. Cleopas and his friend recognized Jesus when
A. He disappeared. B. they talked to him.
72. Who among these people was not among those who were raised by Jesus?
A. Son of the widow of Nain.
B. Jairus daughters.
C. The woman who was bleeding.
D. Lazarus.
73. What was done by Joseph of Arimathea during the time of Jesus?
A. Offered a tomb to bury Jesus.
B. Carrying the cross for Jesus.
C. Followed Jesus only.
D. Loved Jesus.
74. What do Christians learn from the story of Sapphirah and Ananias? To be
A. kind. B. honest. C. jealous. D. greedy.
75. Which of the following commandments has a promise to whoever obeys it?
A. Worship no God but me.
B. Do not covet.
C. Do not kill.
D. Respect your father and mother.
76. During which occasion were these words said, "This is my own dear son, with whom I am pleased?"
A. Jesus baptism.
B. Death of Jesus.
C. Resurrection of Jesus.
D. Ascension of Jesus.
77. Jesus fed 5000 people with loaves of bread and fish.
A. a few bread and 7 B. 2,5
C. 7 and a few D. 5,2
78. When we preach to sinners about Jesus Christ we are said to be
A. prophets. B. unbelievers.
C. witnesses. D. priests.
79. How did the Holy Spirit come to the disciples when they were in a room?
A. In form of water and fire.
B. In form of wind and fire.
C. In form of cloud and dove.
D. In form of water and dove.
80. When does one experience new life?
A. When he believes and accepts Jesus.
B. When he goes to church.
C. When he attends the choir.
D. When he reads the bible.
81. What might happen to a Christian who cheats always?
A. He might be happy.
B. He might have peace of mind.
C. He might go to heaven.
D. He might not go to paradise.
82. What did Jesus mean when he said, "I am the light and life"?
A. I will live forever.
B. I will die once and for all.
C. He has given us hope in life.
D. He will not die physically.
83. Which one of the following is a fruit of the Holy Spirit?
A. Knowledge. B. Wisdom. C. Healing. D. Joy.
84. What did the Maasai give to their God?
A. We should be ready to forgive.
B. We should eat with animals.
C. We should travel.
D. We should enjoy life carelessly.
86. Which one of the following is not a result of irresponsible sexual behaviour between boys and girls?
A. Getting HIV and AIDS.
B. Getting pregnant.
C. Passing exams with flying colours.
D. Dropping out of school.
87. Why should young Christians spend their time wisely?
A. To please people.
B. To annoy parents.
C. To fail exams.
D. To be responsible always in whatever they do.
88. The annunciation of Jesus' birth was done by one of the following. Who is it?
A. Isaiah. B. An Angel.
C. God. D. John the Baptist.
89. Kamau does not like helping his parents at home during holidays. What advice can you give to Kamau?
A. It is good to assist the parents.
B. Run away from home.
C. Lock himself in a room.
D. Beat him.
90. Which one of the following was done traditionally?
A. Reading the bible.
B. Going to church.
C. Respecting the elderly.
D. Going to school.